

## Incoming 6<sup>th</sup> Grade Math Summer Assignment

- The purpose of this assignment is to help you practice the skills that will be necessary for your success in the 6<sup>th</sup> grade, and should reflect the work you completed during 5<sup>th</sup> grade.
- This summer assignment will be collected when you return to school in September.
- It is your responsibility to visit Khan Academy online for tutorials if you need clarification on any of the math skills.

### Multiple Choice

Identify the choice that best completes the statement or answers the question.

- \_\_\_\_\_ 1. Find the factors of the number.

27

- a. 1, 27  
b. 3, 9

- c. 1, 3, 9, 27  
d. 3, 9, 27

- \_\_\_\_\_ 2. Find the first five multiples of the number.

6

- a. 6, 12, 18, 24, 30  
b. 6, 12, 18, 30, 36

- c. 12, 18, 24, 30, 36  
d. 6, 12, 18, 22, 30

- \_\_\_\_\_ 3. Find the first five multiples of the number.

9

- a. 18, 27, 36, 45, 54  
b. 9, 18, 27, 36, 45

- c. 9, 18, 27, 45, 54  
d. 9, 18, 24, 36, 45

- \_\_\_\_\_ 4. Identify all of the prime numbers in the set of numbers.

4, 7, 15, 19, 24, 27

- a. 7, 15, 19, 27  
b. 7, 19

- c. 7, 19, 27  
d. 7

- \_\_\_\_\_ 5. Use the order of operations to simplify the expression.

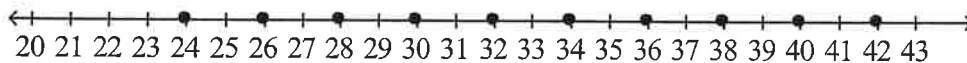
$(6 + 18) \div 3 \times 2$

- a. 4  
b. 16

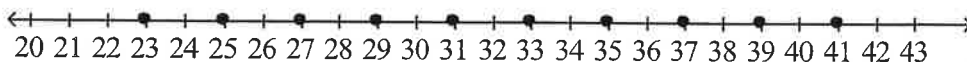
- c. 18  
d. 24

- \_\_\_\_\_ 6. Draw a horizontal number line to represent the set of even numbers from 22 to 42.

a.



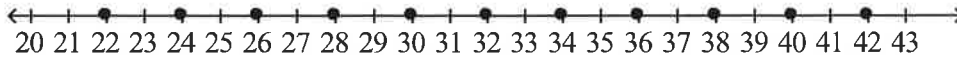
b.



c.



d.

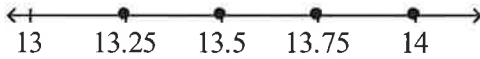


7. Draw a horizontal number line to represent the set of decimals between 13 and 14 with an interval of 0.25 between each pair of decimals.

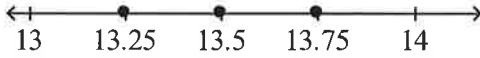
a.



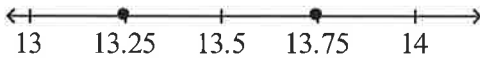
b.



c.



d.



8. Which of the following statements is true? Use the number to help you.



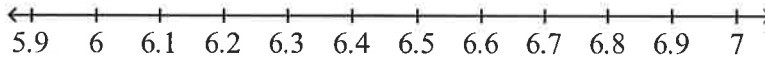
a.  $\frac{1}{3} > \frac{3}{5}$

c.  $\frac{3}{4} > \frac{5}{6}$

b.  $\frac{1}{8} < \frac{2}{3}$

d.  $\frac{5}{8} < \frac{2}{7}$

9. Which of the following statements is true? Use the number to help you.




a.  $6.09 > 6.90$

c.  $6.77 > 6.23$

b.  $6.11 < 6.04$

d.  $6.64 > 6.82$

10. Which of the following statements is true? Use the number to help you.



a.  $\frac{1}{3} > 0.55$

c.  $\frac{3}{5} < 0.82$

b.  $\frac{2}{5} < 0.15$

d.  $\frac{3}{8} > 0.22$

11. Add  $7.21 + 2.6$ .

a. 7.27

c. 9.27

b. 7.81

d. 9.81

12. Subtract  $6.4 - 3.82$ .

a. 2.22

c. 3.42

b. 2.58

d. 3.58

- \_\_\_\_\_ 13. Write the improper fraction as a mixed number in simplest form.

$$\frac{39}{8}$$

a.  $4\frac{1}{8}$

c.  $4\frac{7}{8}$

b.  $4\frac{6}{8}$

d.  $4\frac{3}{4}$

- \_\_\_\_\_ 14. Write the mixed number as an improper fraction.

$$4\frac{5}{7}$$

a.  $\frac{16}{7}$

c.  $\frac{33}{7}$

b.  $\frac{28}{7}$

d.  $\frac{55}{7}$

- \_\_\_\_\_ 15. Find the product in simplest form.

$$\frac{5}{6} \times \frac{7}{8}$$

a.  $\frac{35}{48}$

c.  $\frac{1}{4}$

b.  $\frac{12}{14}$

d.  $\frac{12}{48}$

- \_\_\_\_\_ 16. Which fraction is **not** equivalent to  $\frac{24}{36}$  using division?

a.  $\frac{12}{18}$

c.  $\frac{2}{3}$

b.  $\frac{4}{6}$

d.  $\frac{20}{32}$

- \_\_\_\_\_ 17. Which value completes the pair of equivalent fractions?

$$\frac{14}{15} = \frac{?}{90}$$

a. 84

c. 112

b. 98

d. 126

- \_\_\_\_\_ 18. What is the fraction written in simplest form?

$$\frac{48}{72}$$

a.  $\frac{8}{12}$

c.  $\frac{6}{9}$

b.  $\frac{4}{6}$

d.  $\frac{2}{3}$

- \_\_\_\_\_ 19. Find the unknown measurement.

$$3 \text{ gallons} = ? \text{ pints}$$

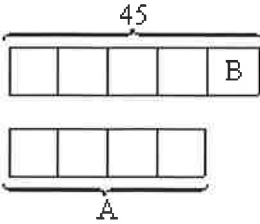
a. 6

c. 18

b. 12

d. 24

20. Find the values of A and B.



- a.  $A = 36; B = 9$                       c.  $A = 20; B = 5$   
b.  $A = 27; B = 9$                       d.  $A = 36; B = 5$

21. Find the product. Express the product in simplest form.

$$3 \times 6\frac{5}{7}$$

- a.  $9\frac{5}{7}$                                       c.  $20\frac{1}{7}$   
b.  $18\frac{5}{7}$                                     d.  $21\frac{1}{7}$

22. If 8 units represents 24 feet, find the value of 48 units.

- a. 144                                      c. 66  
b. 64                                        d. 16

23. Write the ratio in simplest form.

$$36 \text{ in.} : 324 \text{ in.}$$

- a. 3 in. : 108 in.                      c. 4 in. : 36 in.  
b. 1 in. : 9 in.                         d. 1 in. : 18 in.

24. Find two ratios equivalent to the given ratio.

$$5 : 7$$

- a. 10 : 14 and 20 : 35                c. 10 : 14 and 20 : 21  
b. 25 : 35 and 30 : 42                d. 30 : 42 and 35 : 56

25. Find two ratios equivalent to the given ratio.

$$6 : 5$$

- a. 18 : 15 and 42 : 45                c. 24 : 20 and 36 : 35  
b. 18 : 20 and 36 : 30                d. 12 : 10 and 48 : 40

26. Find the missing numerator and denominator.

$$\frac{5}{7} = \frac{\square}{21} = \frac{25}{\square}$$

- a. 10; 35                                    c. 15; 40  
b. 20; 35                                    d. 15; 35

27. Find the missing numerator and denominator.

$$\frac{7}{12} = \frac{28}{\square} = \frac{\square}{84}$$

- a. 36; 49                                    c. 48; 49  
b. 48; 56                                    d. 36; 42

28. Write the fraction in simplest form.

$$\frac{16}{48}$$

a.  $\frac{8}{24}$

b.  $\frac{4}{12}$

c.  $\frac{1}{4}$

d.  $\frac{1}{3}$

29. Find the product. Express your answer in simplest form.

$$\frac{12}{20} \times 35$$

a. 10

b. 21

c. 22

d. 27

30. Find the product. Express your answer in simplest form.

$$\frac{5}{16} \times 36$$

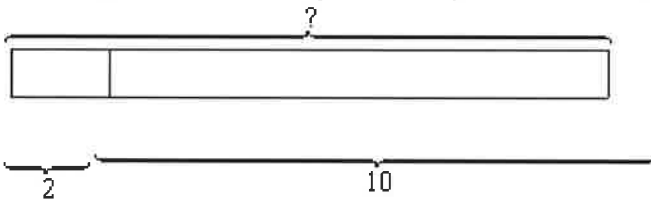
a.  $3\frac{1}{2}$

b.  $10\frac{5}{4}$

c.  $11\frac{1}{4}$

d.  $11\frac{3}{4}$

31. Which operation can be represented by this bar model?



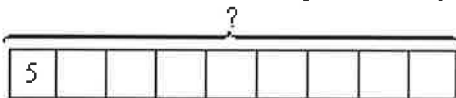
a.  $2 + 10$

b.  $10 - 2$

c.  $10 \div 2$

d.  $2 \times 10$

32. Which operation can be represented by this bar model?



a.  $5 + 9$

b.  $9 - 5$

c.  $9 \div 5$

d.  $5 \times 9$

33. What are the common factors of the pair of numbers?

40 and 48

a. 1, 2, and 4

b. 1, 2, 4, and 6

c. 1, 2, and 8

d. 1, 2, 4 and 8

34. Complete the statement.

The \_\_\_\_\_ of 8 and 9 is  $8 \times 9$ .

a. quotient

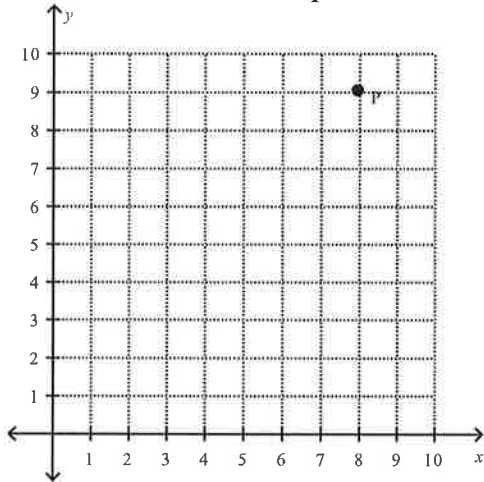
b. sum

c. difference

d. product

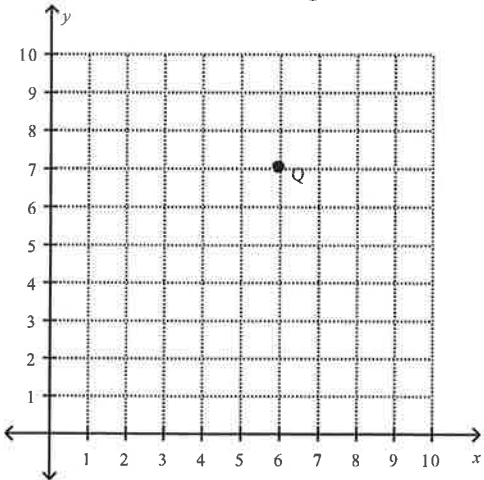
35. Complete the statement.  
The \_\_\_\_\_ of 16 and 4 is  $16 - 4$ .
- a. quotient  
b. sum  
c. difference  
d. product
36. Which number is less than  $14 - 6$ ?
- a. 7  
b. 8  
c. 20  
d. 146
37. Which statement is true?
- a.  $7 \times 8 > 35 + 21$   
b.  $7 \times 8 < 35 + 21$   
c.  $8 \times 7 > 21 + 35$   
d.  $8 \times 7 = 35 + 21$
38. Which inequality symbol makes this comparison true?  
 $4 \times 25 \bigcirc 100 + 4$
- a. +  
b. <  
c. =  
d. >

39. Name the coordinates for point  $P$  on the coordinate plane.



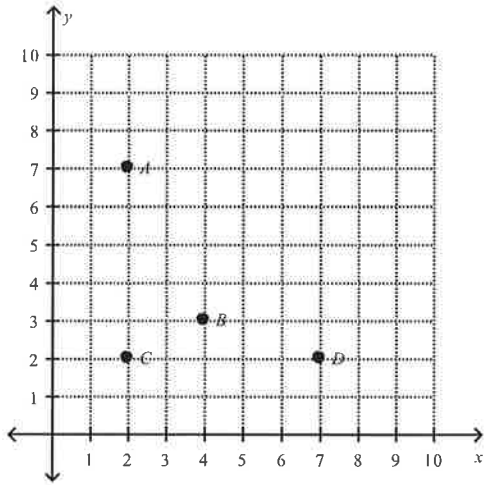
- a. (8, 9)  
b. (8, 8)  
c. (9, 9)  
d. (7, 9)

40. Name the coordinates for point  $Q$  on the coordinate plane.



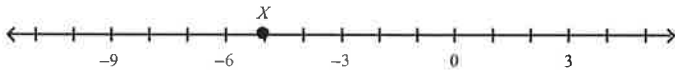
- a. (7, 6)
- b. (6, 6)
- c. (6, 7)
- d. (7, 7)

41. Which point is plotted at  $(7, 2)$ ?



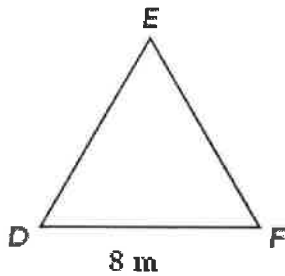
- a. A
- b. B
- c. C
- d. D

42. Name the number that Point  $X$  represents.



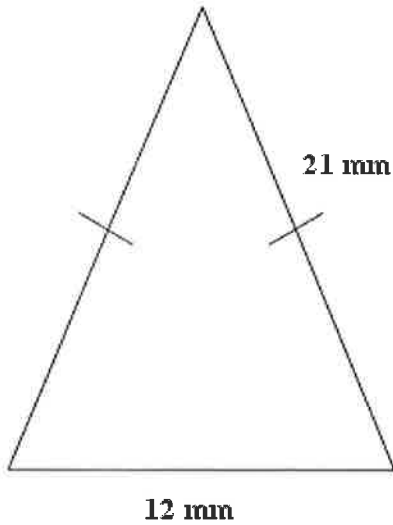
- a. 5
- b. 0
- c. -5
- d. -6

43. Find the perimeter of the equilateral triangle  $DEF$ .



- a. 4 m
- b. 8 m
- c. 24 m
- d. 32 m

44. Find the perimeter of the isosceles triangle below.



- a. 50 mm
- b. 54 mm
- c. 64 mm
- d. 63 mm

\_\_\_ 45. The length of a rectangle is 13 meters and its width is 8 meters. Find the area of the rectangle.

- a.  $21 \text{ m}^2$
- b.  $42 \text{ m}^2$
- c.  $84 \text{ m}^2$
- d.  $104 \text{ m}^2$

\_\_\_ 46. Add.  $7.86 + 0.785$

- a. 7.075
- b. 7.545
- c. 8.585
- d. 8.645

\_\_\_ 47. Subtract.  $7.124 - 0.986$

- a. 6.138
- b. 7.862
- c. 7.938
- d. 8.1110

\_\_\_ 48. Multiply.  $6.45 \times 3$

- a. 1.935
- b. 19.35
- c. 193.5
- d. 1935

\_\_\_ 49. Divide.  $2.79 \div 3$

- a. 0.093
- b. 0.93
- c. 9.3
- d. 93

\_\_\_ 50. Round 6.82 the nearest whole number.

- a. 5
- b. 6
- c. 7
- d. 8